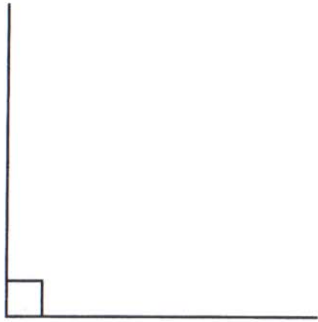
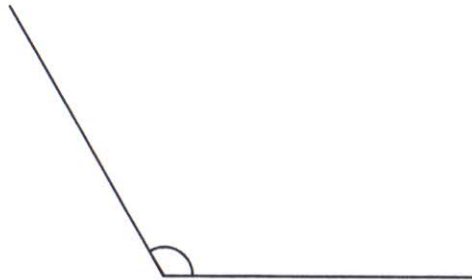


# Types of Angles Worksheet

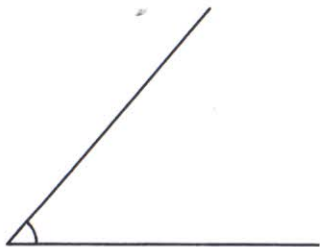
Look at these different angles:



Right Angle - a square  $90^\circ$ .



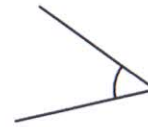
Obtuse Angle - is greater than a right angle.



Acute Angle - is smaller than a right angle.

Write the type of angle:

1.



\_\_\_\_\_

2.



\_\_\_\_\_

3.



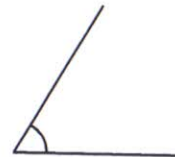
\_\_\_\_\_

4.



\_\_\_\_\_

5.



\_\_\_\_\_

6.



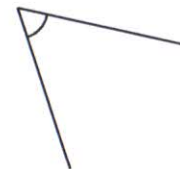
\_\_\_\_\_

7.



\_\_\_\_\_

8.



\_\_\_\_\_